

**Open and/or Unbounded Domains** Finding absolute maximum and minimum values of a function on an open domain (for example,  $R = \{(x, y) = x^2 + y^2 < 9\}$ ) or an unbounded domain (for example,  $R = \{(x, y): x > 0, y > 0\}$ ) presents additional challenges. Because there is no systematic procedure for dealing with such problems, some ingenuity is generally needed.

**EXAMPLE 7 Absolute extreme values on an open set** Find the absolute maximum and minimum values of  $f(x, y) = 4 - x^2 - y^2$  on the open disk  $R = \{(x, y): x^2 + y^2 < 1\}$  (if they exist).

**SOLUTION** You should verify that  $f$  has a critical point at  $(0, 0)$  and it corresponds to a local maximum (on an inverted paraboloid). Moving away from  $(0, 0)$  in all directions, the function values decrease, so  $f$  also has an absolute maximum at  $(0, 0)$ . The boundary of  $R$  is the unit circle  $\{(x, y): x^2 + y^2 = 1\}$ , which is not contained in  $R$ . As  $(x, y)$  approaches any point on the unit circle along any path in  $R$ , the function values  $f(x, y) = 4 - (x^2 + y^2)$  decrease and approach 3 but never reach 3. Therefore,  $f$  does not have an absolute minimum on  $R$ . *Related Exercises 45–52* ◀

**QUICK CHECK 4** Does the linear function  $f(x, y) = 2x + 3y$  have an absolute maximum or minimum value on the open unit square  $\{(x, y): 0 < x < 1, 0 < y < 1\}$ ? ◀

**EXAMPLE 8 Absolute extreme values on an open set** Find the point(s) on the plane  $x + 2y + z = 2$  closest to the point  $P(2, 0, 4)$ .

**SOLUTION** Suppose that  $(x, y, z)$  is a point on the plane, which means that  $z = 2 - x - 2y$ . The distance between  $P(2, 0, 4)$  and  $(x, y, z)$  that we seek to minimize is

$$d(x, y, z) = \sqrt{(x - 2)^2 + y^2 + (z - 4)^2}.$$

It is easier to minimize  $d^2$ , which has the same critical points as  $d$ . Squaring  $d$  and eliminating  $z$  using  $z = 2 - x - 2y$ , we have

$$\begin{aligned} f(x, y) &= (d(x, y, z))^2 = (x - 2)^2 + y^2 + (-x - 2y - 2)^2 \\ &= 2x^2 + 5y^2 + 4xy + 8y + 8 \end{aligned}$$

The critical points of  $f$  satisfy the equations

$$f_x = 4x + 4y = 0 \quad \text{and} \quad f_y = 4x + 10y + 8 = 0,$$

whose only solution is  $x = \frac{4}{3}, y = -\frac{4}{3}$ . The Second Derivative Test confirms that this point corresponds to a local minimum of  $f$ . We now ask: Does  $(\frac{4}{3}, -\frac{4}{3})$  correspond to the absolute minimum value of  $f$  over the entire domain of the problem, which is  $\mathbf{R}^2$ ? Because the domain has no boundary, we cannot check values of  $f$  on the boundary. Instead, we argue geometrically that there is exactly one point on the plane that is closest to  $P$ . We have found a point that is closest to  $P$  among nearby points on the plane. As we move away from this point, the values of  $f$  increase without bound. Therefore,  $(\frac{4}{3}, -\frac{4}{3})$  corresponds to the absolute minimum value of  $f$ . A graph of  $f$  (Figure 12.93) confirms this reasoning, and we conclude that the point  $(\frac{4}{3}, -\frac{4}{3}, \frac{10}{3})$  is the point on the plane nearest  $P$ . *Related Exercises 45–52* ◀

▶ Notice that  $\frac{\partial}{\partial x}(d^2) = 2d \frac{\partial d}{\partial x}$  and  $\frac{\partial}{\partial y}(d^2) = 2d \frac{\partial d}{\partial y}$ . Because  $d \geq 0$ ,  $d^2$  and  $d$  have the same critical points.

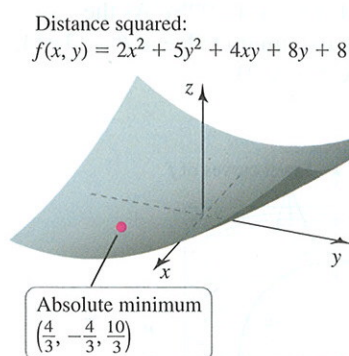


FIGURE 12.93

## SECTION 12.8 EXERCISES

### Review Exercises

- Describe the appearance of a smooth surface with a local maximum at a point.
- Describe the usual appearance of a smooth surface at a saddle point.

- What are the conditions for a critical point of a function  $f$ ?
- If  $f_x(a, b) = f_y(a, b) = 0$ , does it follow that  $f$  has a local maximum or local minimum at  $(a, b)$ ? Explain.
- What is the discriminant and how do you compute it?

## 12.8 Maximum/Minimum Problems

- Explain how the Second Derivative Test is used.
- What is an absolute minimum value of a function  $f$  on a set  $R$  in  $\mathbf{R}^2$ ?
- What is the procedure for locating absolute maximum and minimum values on a closed bounded domain?

### Basic Skills

9–14. **Critical points** Find all critical points of the following functions.

- $f(x, y) = 1 + x^2 + y^2$
- $f(x, y) = x^2 - 6x + y^2 + 8y$
- $f(x, y) = (3x - 2)^2 + (y - 4)^2$
- $f(x, y) = 3x^2 - 4y^2$
- $f(x, y) = x^4 + y^4 - 16xy$
- $f(x, y) = x^3/3 - y^3/3 + 3xy$

15–28. **Analyzing critical points** Find the critical points of the following functions. Use the Second Derivative Test to determine (if possible) whether each critical point corresponds to a local maximum, local minimum, or saddle point. Confirm your results using a graphing utility.

- $f(x, y) = 4 + 2x^2 + 3y^2$
- $f(x, y) = (4x - 1)^2 + (2y + 4)^2 + 1$
- $f(x, y) = -4x^2 + 8y^2 - 3$
- $f(x, y) = x^4 + y^4 - 4x - 32y + 10$
- $f(x, y) = x^4 + 2y^2 - 4xy$
- $f(x, y) = xy e^{-x-y}$
- $f(x, y) = \sqrt{x^2 + y^2 - 4x + 5}$
- $f(x, y) = \tan^{-1}(xy)$
- $f(x, y) = 2xy e^{-x^2-y^2}$
- $f(x, y) = x^2 - x^4/2 - y^2 - xy$
- $f(x, y) = \frac{x - y}{1 + x^2 + y^2}$
- $f(x, y) = \frac{xy(x - y)}{x^2 + y^2}$
- $f(x, y) = ye^x - e^y$
- $f(x, y) = \sin(2\pi x) \cos(\pi y)$ , for  $|x| \leq \frac{1}{2}$  and  $|y| \leq \frac{1}{2}$ .

29. **Shipping regulations** A shipping company handles rectangular boxes provided the sum of the height and the girth of the box does not exceed 96 in. (The girth is the perimeter of the smallest base of the box.) Find the dimensions of the box that meets this condition and has the largest volume.

30. **Cardboard boxes** A lidless box is to be made using  $2 \text{ m}^2$  of cardboard. Find the dimensions of the box with the largest possible volume.

31. **Cardboard boxes** A lidless cardboard box is to be made with a volume of  $4 \text{ m}^3$ . Find the dimensions of the box that requires the least amount of cardboard.

32. **Optimal box** Find the dimensions of the largest rectangular box in the first octant of the  $xyz$ -coordinate system that has one vertex at the origin and the opposite vertex on the plane  $x + 2y + 3z = 6$ .

33–36. **Inconclusive tests** Show that the Second Derivative test is inconclusive when applied to the following functions at  $(0, 0)$ . Describe the behavior of the function at the critical point.

- $f(x, y) = 4 + x^4 + 3y^4$
- $f(x, y) = x^2y - 3$
- $f(x, y) = x^4y^2$
- $f(x, y) = \sin(x^2y^2)$

37–44. **Absolute maxima and minima** Find the absolute maximum and minimum values of the following functions on the given set  $R$ .

- $f(x, y) = x^2 + y^2 - 2y + 1$ ;  $R = \{(x, y): x^2 + y^2 \leq 4\}$
- $f(x, y) = -x^2 - y^2 + \sqrt{3}x - y - 1$ ;  
 $R = \{(x, y): x^2 + y^2 \leq 6\}$
- $f(x, y) = 4 + 2x^2 + y^2$ ;  
 $R = \{(x, y): -1 \leq x \leq 1, -1 \leq y \leq 1\}$
- $f(x, y) = 6 - x^2 - 4y^2$ ;  
 $R = \{(x, y): -2 \leq x \leq 2, -1 \leq y \leq 1\}$
- $f(x, y) = x^2 + y^2 + 4x - 2y$ ;  $R = \{(x, y): x^2 + y^2 \leq 16\}$
- $f(x, y) = x^2 + y^2 - 2x - 2y$ ;  $R$  is the closed set bounded by the triangle with vertices  $(0, 0)$ ,  $(2, 0)$ , and  $(0, 2)$ .
- $f(x, y) = x^2 + 4y^2 + 2x + 4y$ ;  $R$  is the closed set bounded by the ellipse  $\{(x, y): x = 4 \cos \theta, y = \sin \theta, \text{ for } 0 \leq \theta \leq 2\pi\}$ .
- $f(x, y) = \sqrt{x^2 + y^2 - 2x + 2}$ ;  $R$  is the closed half disk  $\{(x, y): x^2 + y^2 \leq 4 \text{ with } y \geq 0\}$ .

45–48. **Absolute extrema on open and/or unbounded sets** If possible, find the absolute maximum and minimum values of the following functions on the set  $R$ .

- $f(x, y) = x^2 + y^2 - 4$ ;  $R = \{(x, y): x^2 + y^2 < 4\}$
- $f(x, y) = x + 3y$ ;  $R = \{(x, y): |x| < 1, |y| < 2\}$
- $f(x, y) = 2e^{-x-y}$ ;  $R = \{(x, y): x \geq 0, y \geq 0\}$
- $f(x, y) = x^2 - y^2$ ;  $R = \{(x, y): |x| < 1, |y| < 1\}$

49–52. **Absolute extrema on open and/or unbounded sets**

- Find the point on the plane  $x + y + z = 4$  nearest the point  $P(0, 3, 6)$ .
- Find the point(s) on the cone  $z^2 = x^2 + y^2$  nearest the point  $P(1, 4, 0)$ .
- Find the point on the surface  $f(x, y) = x^2 + y^2 + 10$  nearest the plane  $x + 2y - z = 0$ . Identify the point on the plane.
- Rectangular boxes with a volume of  $10 \text{ m}^3$  are to be made of two materials. The material for the top and bottom of the box costs  $\$8/\text{m}^2$  and the material for the sides of the box costs  $\$1/\text{m}^2$ . What are the dimensions of the box that minimizes the cost of the box?

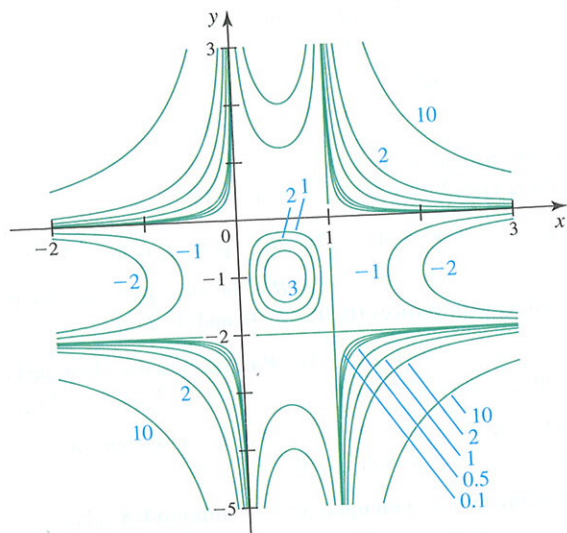


## Further Explorations

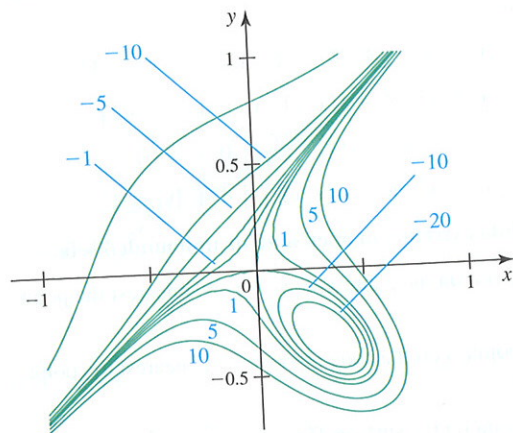
53. **Explain why or why not** Determine whether the following statements are true and give an explanation or counterexample. Assume that  $f$  is differentiable at the points in question.
- The fact that  $f_x(2, 2) = f_y(2, 2) = 0$  implies that  $f$  has a local maximum, local minimum, or saddle point at  $(2, 2)$ .
  - The function  $f$  could have a local maximum at  $(a, b)$  where  $f_y(a, b) \neq 0$ .
  - The function  $f$  could have both an absolute maximum and an absolute minimum at two different points that are not critical points.
  - The tangent plane is horizontal at a point on a surface corresponding to a critical point.

54–55. **Extreme points from contour plots** Based on the level curves that are visible in the following graphs, identify the approximate locations of the local maxima, local minima, and saddle points.

54.



55.



56. **Optimal box** Find the dimensions of the rectangular box with maximum volume in the first octant with one vertex at the origin and the opposite vertex on the ellipsoid  $36x^2 + 4y^2 + 9z^2 = 36$ .
57. **Least distance** What point on the plane  $x - y + z = 2$  is closest to the point  $(1, 1, 1)$ ?

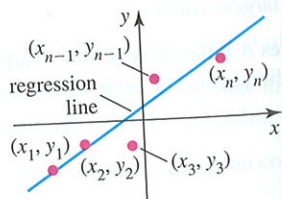
58. **Maximum/Minimum of linear functions** Let  $R$  be a closed bounded set in  $\mathbb{R}^2$  and let  $f(x, y) = ax + by + c$ , where  $a, b$ , and  $c$  are real numbers, with  $a$  and  $b$  not both zero. Give a geometrical argument explaining why the absolute maximum and minimum values of  $f$  over  $R$  occur on the boundaries of  $R$ .
59. **Magic triples** Let  $x, y$ , and  $z$  be nonnegative numbers with  $x + y + z = 200$ .
- Find the values of  $x, y$ , and  $z$  that minimize  $x^2 + y^2 + z^2$ .
  - Find the values of  $x, y$ , and  $z$  that minimize  $\sqrt{x^2 + y^2 + z^2}$ .
  - Find the values of  $x, y$ , and  $z$  that maximize  $xyz$ .
  - Find the values of  $x, y$ , and  $z$  that maximize  $x^2y^2z^2$ .
60. **Powers and roots** Assume that  $x + y + z = 1$  with  $x \geq 0$ ,  $y \geq 0$ , and  $z \geq 0$ .
- Find the maximum and minimum values of  $(1 + x^2)(1 + y^2)(1 + z^2)$ .
  - Find the maximum and minimum values of  $(1 + \sqrt{x})(1 + \sqrt{y})(1 + \sqrt{z})$ .

[Source: Math Horizons (April 2004).]

## Applications

61. **Optimal locations** Suppose  $n$  houses are located at the distinct points  $(x_1, y_1), (x_2, y_2), \dots, (x_n, y_n)$ . A power substation must be located at a point such that the sum of the squares of the distances between the houses and the substation is minimized.
- Find the optimal location of the substation in the case that  $n = 3$  and the houses are located at  $(0, 0), (2, 0)$ , and  $(1, 1)$ .
  - Find the optimal location of the substation in the case that  $n = 3$  and the houses are located at distinct points  $(x_1, y_1), (x_2, y_2)$ , and  $(x_3, y_3)$ .
  - Find the optimal location of the substation in the general case of  $n$  houses located at distinct points  $(x_1, y_1), (x_2, y_2), \dots, (x_n, y_n)$ .
  - You might argue that the locations found in parts (a), (b) and (c) are not optimal because they result from minimizing the sum of the squares of the distances, not the sum of the distances themselves. Use the locations in part (a) and write the function that gives the sum of the distances. Note that minimizing this function is much more difficult than in part (a). Then use a graphing utility to determine whether the optimal location is the same in the two cases. (Also see Exercise 69 about Steiner's problem.)

62–65. **Least squares approximation** In its many guises, least squares approximation arises in numerous areas of mathematics and statistics. Suppose you collect data for two variables (for example, height and shoe size) in the form of pairs  $(x_1, y_1), (x_2, y_2), \dots, (x_n, y_n)$ . The data may be plotted as a scatterplot in the  $xy$ -plane, as shown in the figure. The technique known as linear regression asks the question: What is the equation of the line that "best fits" the data? The least squares criterion for best fit requires that the sum of the squares of the vertical distances between the line and the data points is a minimum.



62. Let the equation of the best-fit line be  $y = mx + b$ , where the slope  $m$  and the  $y$ -intercept  $b$  must be determined using the least squares condition. First assume that there are three data points  $(1, 2), (3, 5)$ , and  $(4, 6)$ . Show that the function of  $m$  and  $b$  that gives the sum of the squares of the vertical distances between the line and the three data points is

$$E(m, b) = [(m + b) - 2]^2 + [(3m + b) - 5]^2 + [(4m + b) - 6]^2.$$

Find the critical points of  $E$  and find the values of  $m$  and  $b$  that minimize  $E$ . Graph the three data points and the best-fit line.

63. Generalize the procedure in Exercise 62 by assuming that  $n$  data points  $(x_1, y_1), (x_2, y_2), \dots, (x_n, y_n)$  are given. Write the function  $E(m, b)$  (summation notation allows for a more compact calculation). Show that the coefficients of the best-fit line are

$$m = \frac{(\sum x_k)(\sum y_k) - n \sum x_k y_k}{(\sum x_k)^2 - n \sum x_k^2},$$

$$b = \frac{1}{n} (\sum y_k - m \sum x_k),$$

where all sums run from  $k = 1$  to  $k = n$ .

- 64–65. **Least squares practice** Use the results of Exercise 63 to find the best-fit line for following data sets. Plot the points and the best-fit line.

64.  $(0, 0), (2, 3), (4, 5)$

65.  $(-1, 0), (0, 6), (3, 8)$

## Additional Exercises

66. **Second Derivative Test** Prove that if  $(a, b)$  is a critical point of  $f$  at which  $f_x(a, b) = f_y(a, b) = 0$  and  $f_{xx}(a, b) < 0 < f_{yy}(a, b)$  or  $f_{yy}(a, b) < 0 < f_{xx}(a, b)$ , then  $f$  has a saddle point at  $(a, b)$ .
67. **Maximum area triangle** Among all triangles with a perimeter of 9 units, find the dimensions of the triangle with the maximum area. It may be easiest to use Heron's formula, which states that the area of a triangle with side length  $a, b$ , and  $c$  is  $A = \sqrt{s(s-a)(s-b)(s-c)}$ , where  $2s$  is the perimeter of the triangle.
68. **Ellipsoid inside a tetrahedron** (1946 Putnam Exam) Let  $P$  be a plane tangent to the ellipsoid  $x^2/a^2 + y^2/b^2 + z^2/c^2 = 1$  at a point in the first octant. Let  $T$  be the tetrahedron in the first octant bounded by  $P$  and the coordinate planes  $x = 0, y = 0$ , and  $z = 0$ . Find the minimum volume of  $T$ . (The volume of a tetrahedron is one-third the area of the base times the height.)
69. **Steiner's problem for three points** Given three distinct non-collinear points  $A, B$ , and  $C$  in the plane, find the point  $P$  in the plane such that the sum of the distances  $|AP| + |BP| + |CP|$  is a minimum. Here is how to proceed with three points, assuming that the triangle formed by the three points has no angle greater than  $2\pi/3$  ( $120^\circ$ ).
- Assume the coordinates of the three given points are  $A(x_1, y_1), B(x_2, y_2)$ , and  $C(x_3, y_3)$ . Let  $d_1(x, y)$  be the distance between  $A(x_1, y_1)$  and a variable point  $P(x, y)$ . Compute the gradient of

- $d_1$  and show that it is a unit vector pointing along the line between the two points.
- Define  $d_2$  and  $d_3$  in a similar way and show that  $\nabla d_2$  and  $\nabla d_3$  are also unit vectors in the direction of the line between the two points.
- The goal is to minimize  $f(x, y) = d_1 + d_2 + d_3$ . Show that the condition  $f_x = f_y = 0$  implies that  $\nabla d_1 + \nabla d_2 + \nabla d_3 = 0$ .
- Explain why part (c) implies that the optimal point  $P$  has the property that the three line segments  $AP, BP$ , and  $CP$  all intersect symmetrically in angles of  $2\pi/3$ .
- What is the optimal solution if one of the angles in the triangle is greater than  $2\pi/3$  (just draw a picture)?
- Estimate the Steiner point for the three points  $(0, 0), (0, 1), (2, 0)$ .

70. **Slicing plane** Find an equation of the plane passing through the point  $(3, 2, 1)$  that slices off the region in the first octant with the least volume.

71. **Two mountains without a saddle** Show that the following two functions have two local maxima but no other extreme points (thus no saddle or basin between the mountains).

- $f(x, y) = -(x^2 - 1)^2 - (x^2 - e^y)^2$
- $f(x, y) = 4x^2e^y - 2x^4 - e^{4y}$

Source: Proposed by Ira Rosenholtz, *Mathematics Magazine* (February, 1987).

72. **Solitary critical points** A function of one variable has the property that a local maximum (or minimum) occurring at the only critical point is also the absolute maximum (or minimum) (for example,  $f(x) = x^2$ ). Does the same result hold for a function of two variables? Show that the following functions have the property that they have a single local maximum (or minimum), occurring at the only critical point, but that the local maximum (or minimum) is not an absolute maximum (or minimum) on  $\mathbb{R}^2$ .

- $f(x, y) = 3xe^y - x^3 - e^{3y}$
- $f(x, y) = (2y^2 - y^4) \left( e^x + \frac{1}{1+x^2} \right) - \frac{1}{1+x^2}$

This property has the following interpretation. Suppose that a surface has a single local minimum that is not the absolute minimum. Then water can be poured into the basin around the local minimum and the surface never overflows, even though there are points on the surface below the local minimum. Source: See three articles in *Mathematics Magazine* (May 1985) and *Calculus and Analytical Geometry*, 2nd ed., Philip Gillett.

## QUICK CHECK ANSWERS

1.  $f_x(2, -1) = f_y(2, -1) = 0$ . 2. Vertically, in the directions  $(0, 0, \pm 1)$  3.  $D(x, y) = -12x^2y^2$  4. It has neither an absolute maximum nor absolute minimum value on this set. <